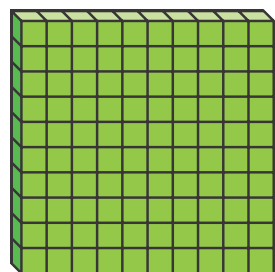
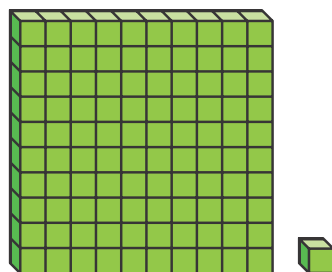


This block shows 100. You say one hundred for this number.



100

The next number you say is one hundred one because you have 1 hundred and 1 one.



101

When you count forward, you keep counting by 1s.

101, 102, 103, 104, 105

105 means 1 hundred and 5 ones. You say one hundred five.

When you count higher, you start with the words one hundred.

116, 117, 118, 119, 120

116 is one hundred sixteen.

Convince Me! How would you say and show 110 when you count? What number comes next?

☆ **Guided Practice** ☆ Count forward by 1s. Write the numbers.

1. 116, 117, 118, 119, 120

2. _____, 110, _____, _____, 113

3. 104, _____, _____, 107, _____

Name _____

Independent Practice

Count forward by 1s. Write the numbers.

4. 110, _____, _____, _____, 114

5. 52, _____, _____, 55, _____

6. _____, 94, _____, 96, _____

7. _____, 102, 103, _____, _____

8. _____, _____, 115, _____, 117

9. 67, _____, _____, _____, 71



Number Sense Use the clues to find each mystery number.

10. Clue 1: The number comes after 116.
 Clue 2: The number comes before 120.
 The mystery number might be:

_____, _____, _____

Clue 3: The number has 8 ones.
 Circle the mystery number.

11. Clue 1: The number comes before 108.
 Clue 2: The number comes after 102.
 The mystery number might be:

_____, _____, _____, _____, _____

Clue 3: The number has 5 ones.
 Circle the mystery number.

Problem Solving ★ Solve each problem below.

12. **Vocabulary** A-Z Marta is counting to 120. She says the number that is one **more** than 113. What number does she say?




13. In this chart, Tom writes the numbers 102 to 108 in order. Some numbers rub off. Help Tom fill in the missing numbers.

102		104	105			108
-----	--	-----	-----	--	--	-----

14. **Reasoning** Shelly counts 109 bottle caps. Then she counts 4 more. How many bottle caps has Shelley counted?

_____ bottle caps



15. **Higher Order Thinking** Pick a number greater than 99 and less than 112. Write the number in the box.

Then write the three numbers that come before it and the number that comes after it.

_____, _____, _____, , _____

16. **Assessment Practice** Which shows the correct order for counting forward by 1s? Choose two that apply.

- 103, 104, 105, 102
 117, 118, 119, 120
 101, 102, 103, 104
 114, 112, 110, 108