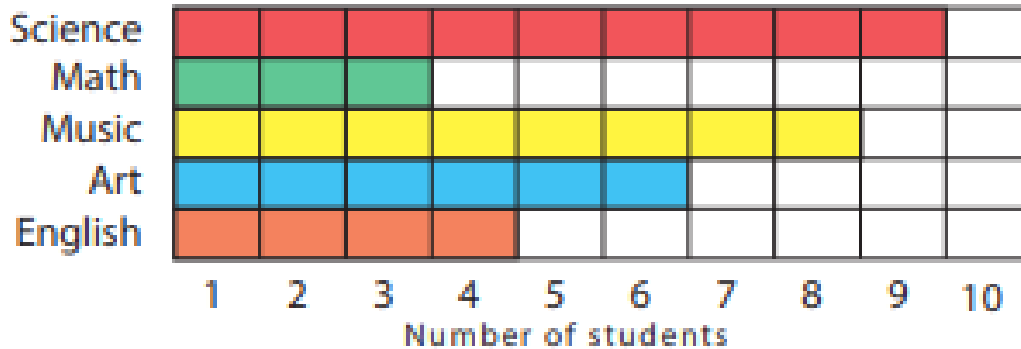



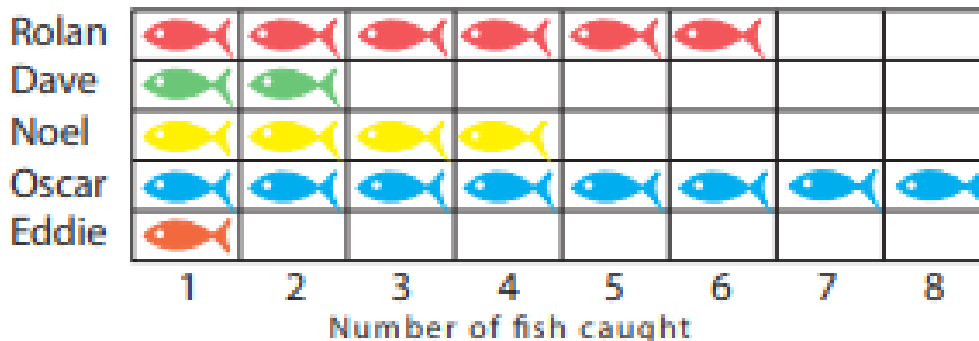
Graph Practice

Favorite subject



1. What subject do the students like the most? _____
2. What subject do the students like the least? _____
3. What subject is the students' second choice? _____
4. How many students like art? _____
5. How many students like English? _____

Fishing trip

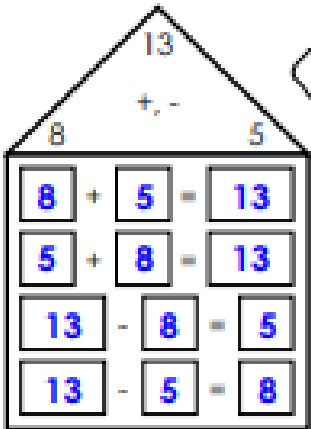
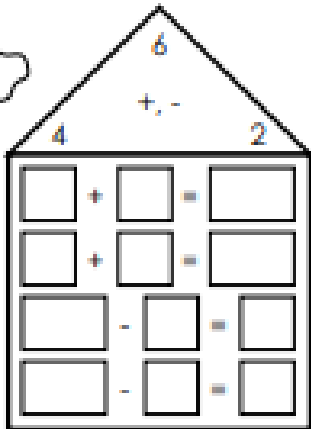
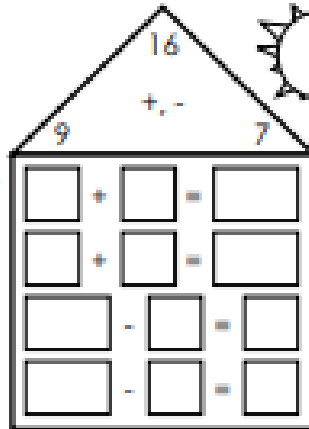


1. Who caught the most fish? _____
2. Who caught the least fish? _____
3. What is the highest number of fish caught? _____
4. How many fish did Eddie catch? _____
5. What is the total number of fish caught? _____

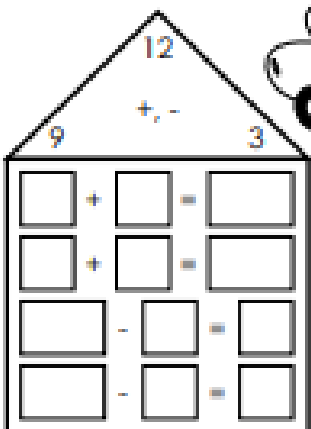
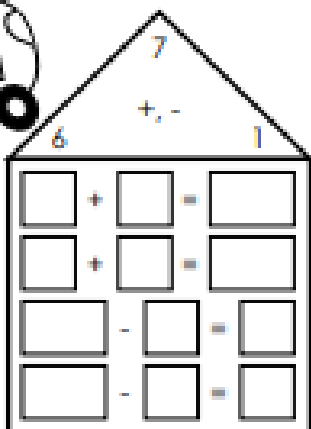
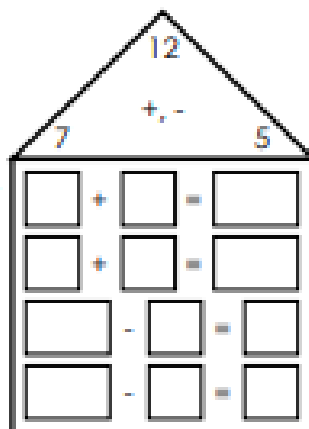
Name: _____

Fact Family Street

Use addition and subtraction to fill in the fact family living in each house.

a.   

d.   

g.   

Counting Practice

Fill in the missing numbers.

40	41	42	43	44						
					56	57	58	59	60	61
60		62		64		66		68		
70			73		75	76			79	
81		83	84			87		89		
90	89	87				83	82			
	75	76				80	81			
90		92				96	97	98		
66	67		69		71				75	