

Name : \_\_\_\_\_

Score : \_\_\_\_\_

Teacher : \_\_\_\_\_

Date : \_\_\_\_\_

---

$$\begin{array}{r} 417 \\ + 555 \\ \hline \end{array}$$

$$\begin{array}{r} 940 \\ + 894 \\ \hline \end{array}$$

$$\begin{array}{r} 919 \\ + 798 \\ \hline \end{array}$$

$$\begin{array}{r} 454 \\ + 856 \\ \hline \end{array}$$

$$\begin{array}{r} 627 \\ + 285 \\ \hline \end{array}$$

$$\begin{array}{r} 122 \\ + 617 \\ \hline \end{array}$$

$$\begin{array}{r} 788 \\ - 407 \\ \hline \end{array}$$

$$\begin{array}{r} 739 \\ - 627 \\ \hline \end{array}$$

$$\begin{array}{r} 629 \\ - 160 \\ \hline \end{array}$$

$$\begin{array}{r} 692 \\ - 539 \\ \hline \end{array}$$

$$\begin{array}{r} 997 \\ - 819 \\ \hline \end{array}$$

$$\begin{array}{r} 994 \\ - 927 \\ \hline \end{array}$$

$$\begin{array}{r} 470 \\ + 143 \\ \hline \end{array}$$

$$\begin{array}{r} 357 \\ + 906 \\ \hline \end{array}$$

$$\begin{array}{r} 970 \\ - 848 \\ \hline \end{array}$$




# Shopping Math: Furniture


Help Jenny decide what furniture to buy. Look at the prices in each category and circle the cheaper ones.

## Lamps

o \$68



o \$86

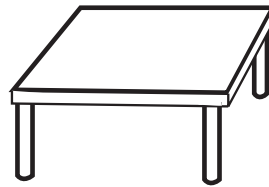


## Tables

o \$142




o \$124

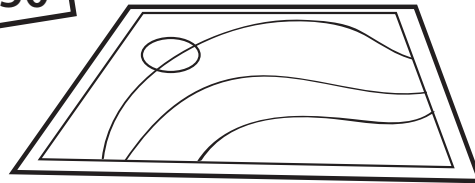


## Rugs

o \$105



o \$150



## Chairs

o \$136

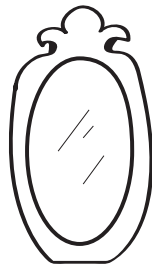


o \$163




## Mirrors

o \$76



o \$67



**Challenge!**

Jenny only has \$230 to spend on furniture. Color in the items she can buy.



Fill in the blank for each of the problems.

Answers

- |  |           |
|--|-----------|
| 1) Count by 100s: 600 , 700 , 800 , _____                  | 1. _____  |
| 2) Count by 5s: 165 , 170 , 175 , 180 , 185 , 190 , _____  | 2. _____  |
| 3) Count by 10s: 700 , 710 , 720 , 730 , 740 , _____       | 3. _____  |
| 4) Count by 5s: 435 , 440 , 445 , 450 , 455 , 460 , _____  | 4. _____  |
| 5) Count by 10s: 500 , 510 , 520 , 530 , 540 , _____       | 5. _____  |
| 6) Count by 5s: 560 , 565 , 570 , 575 , 580 , 585 , _____  | 6. _____  |
| 7) Count by 5s: 385 , 390 , 395 , 400 , 405 , 410 , _____  | 7. _____  |
| 8) Count by 10s: 160 , 170 , 180 , 190 , 200 , _____       | 8. _____  |
| 9) Count by 5s: 800 , 805 , 810 , 815 , 820 , 825 , _____  | 9. _____  |
| 10) Count by 5s: 725 , 730 , 735 , 740 , 745 , 750 , _____ | 10. _____ |
| 11) Count by 5s: 305 , 310 , 315 , 320 , 325 , 330 , _____ | 11. _____ |
| 12) Count by 5s: 240 , 245 , 250 , 255 , 260 , 265 , _____ | 12. _____ |
| 13) Count by 5s: 260 , 265 , 270 , 275 , 280 , 285 , _____ | 13. _____ |
| 14) Count by 10s: 420 , 430 , 440 , 450 , 460 , _____      | 14. _____ |
| 15) Count by 10s: 360 , 370 , 380 , 390 , 400 , _____      | 15. _____ |
| 16) Count by 10s: 200 , 210 , 220 , 230 , 240 , _____      | 16. _____ |
| 17) Count by 100s: 200 , 300 , 400 , _____                 | 17. _____ |
| 18) Count by 10s: 320 , 330 , 340 , 350 , 360 , _____      | 18. _____ |
| 19) Count by 10s: 820 , 830 , 840 , 850 , 860 , _____      | 19. _____ |
| 20) Count by 10s: 80 , 90 , 100 , 110 , 120 , _____        | 20. _____ |