

Diamond Lakes Elementary School

# Kindergarten

## LEARN-@-HOME PACKET

January 10, 2022 - January 12, 2022



Dear Parents/Guardians,

This packet contains 3 ELA worksheets and 3 Math worksheets. Your child should complete at least one of each per day. If you or your child need any further assistance or have any questions, please feel free to reach out to your child's teacher!

Packet Due Date: This packet is due on **Thursday, January 13, 2022** when your child returns back to school in-person.

Name \_\_\_\_\_

Date \_\_\_\_\_

## Spell Out Short Vowel Words

Write the missing vowel for each word below. Choose from:

a

e

i


o

u




\_\_\_\_\_

p \_ n



\_\_\_\_\_

w \_ b



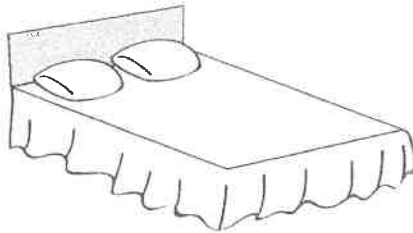
\_\_\_\_\_

b \_ x



\_\_\_\_\_

h \_ t



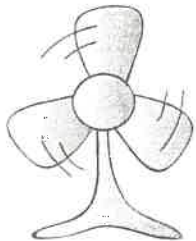
\_\_\_\_\_

b \_ d




\_\_\_\_\_

l \_ g



\_\_\_\_\_

f \_ n



\_\_\_\_\_

r \_ t



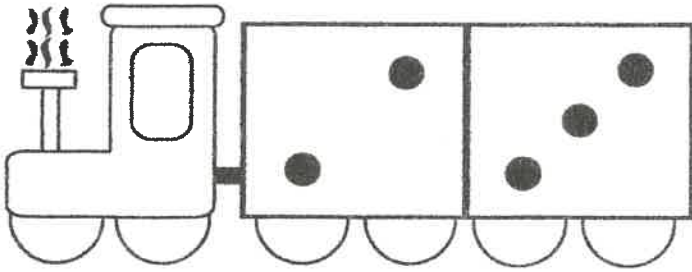
\_\_\_\_\_

c \_ t


What insect spins a web?




# Addition



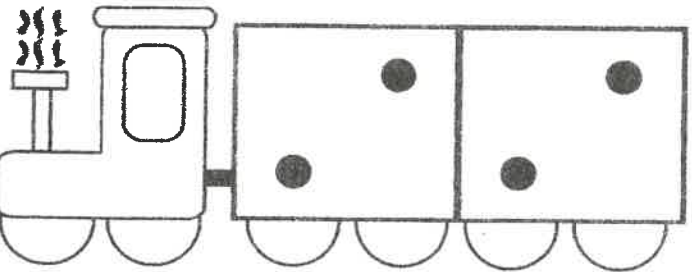
$2 + 3 =$




$3 + 4 =$



$4 + 2 =$



$2 + 2 =$



$3 + 5 =$

Name: \_\_\_\_\_


# BEGINNING SOUNDS




\_\_\_ap



\_\_\_ed



\_\_\_ad



\_\_\_at



\_\_\_en



\_\_\_un



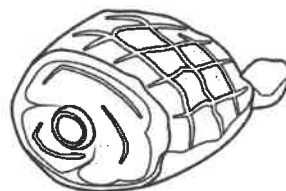
\_\_\_ug



\_\_\_ad

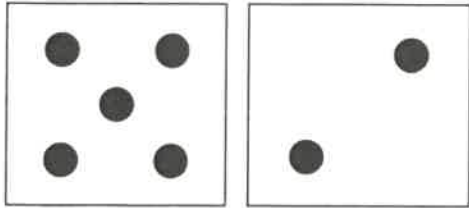


\_\_\_ot

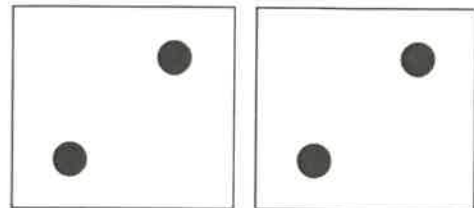


\_\_\_am


# Addition



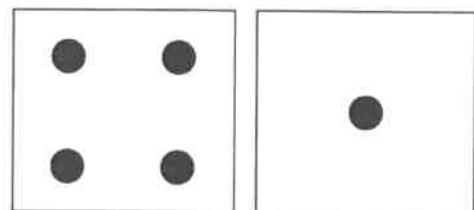
$$5 + 2 = \square$$




$$2 + 2 = \square$$



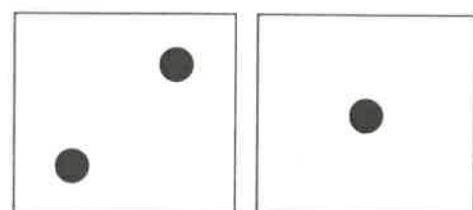
$$5 + 3 = \square$$



$$4 + 1 = \square$$



$$6 + 3 = \square$$















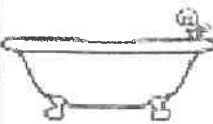
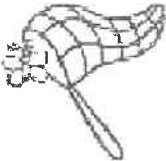
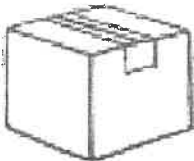

$$2 + 1 = \square$$




Name: \_\_\_\_\_

# Missing Middle Sounds

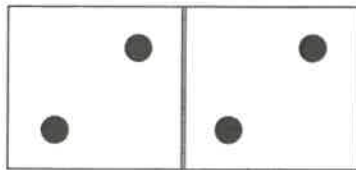
Write the missing middle sound to complete all the CVC words

	h		t		z		p
	b		g		c		n
	h		n		s		n
	p		n		m		p
	r		t		p		n
	p		n		w		g
	t		b		n		t
	b		x		p		g

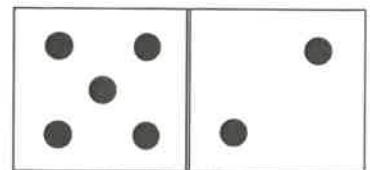
# Addition



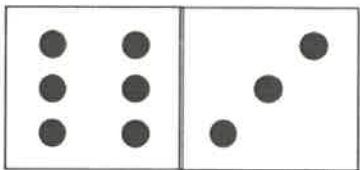
$5 + 3 = \square$




$2 + 2 = \square$



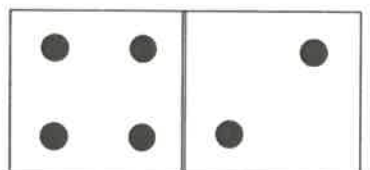
$5 + 2 = \square$



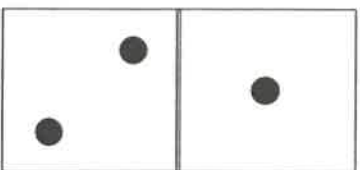
$6 + 3 = \square$



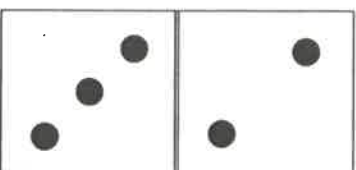
$1 + 1 = \square$




$4 + 2 = \square$



$2 + 1 = \square$



$3 + 2 = \square$



$5 + 5 = \square$