

Name : _____

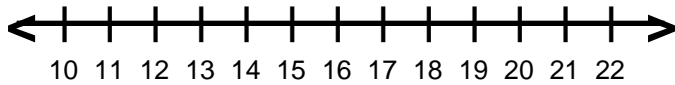
Score : _____

Teacher : _____

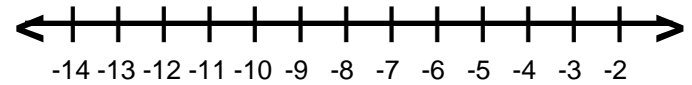
Date : _____

Solve and Graph the Inequalities

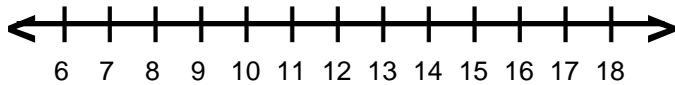
1) $17 > 3 + k$



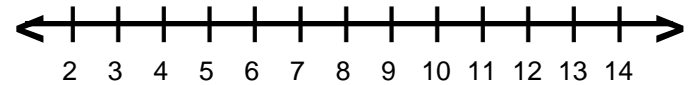
6) $-13 \leq -8 + d$



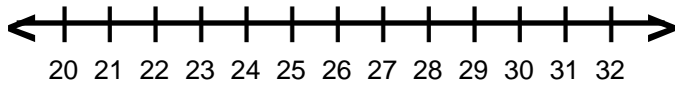
2) $5 \geq g - 7$



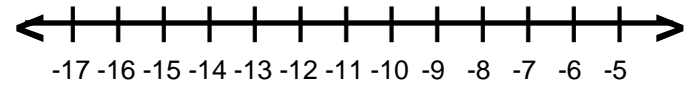
7) $12 \leq c + 4$



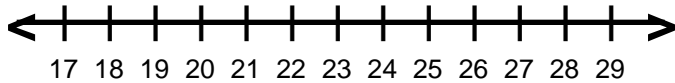
3) $-8 + x < 18$



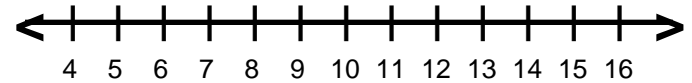
8) $-8 + v < -19$



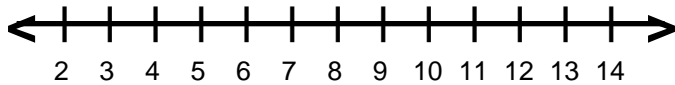
4) $q - 4 < 19$



9) $5 \geq r - 7$



5) $7 + n \geq 14$



10) $a - 8 > -15$

