

Name : _____

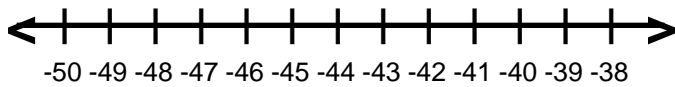
Score : _____

Teacher : _____

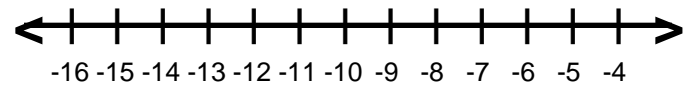
Date : _____

Solve and Graph the Inequalities

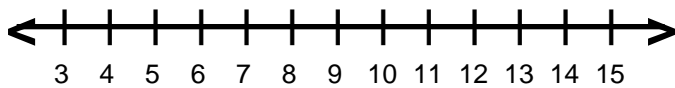
1) $\frac{b}{4} > -12$



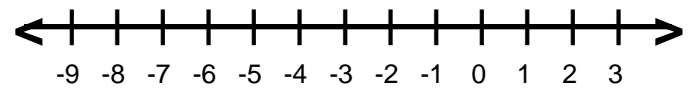
6) $26 \geq -2a$



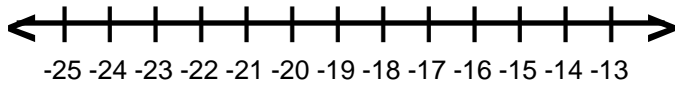
2) $5y \leq 50$



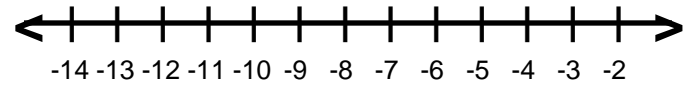
7) $42 < -7s$



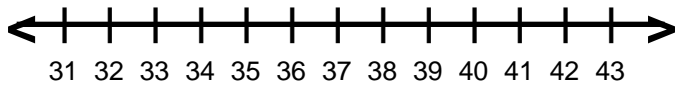
3) $-9 \leq \frac{g}{2}$



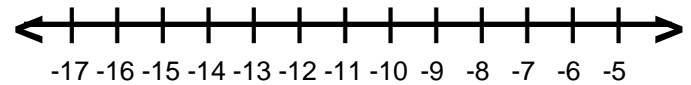
8) $\frac{q}{2} > -5$



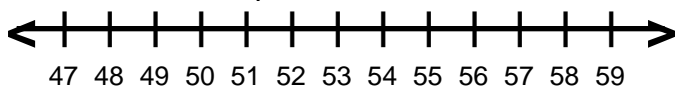
4) $7 > \frac{r}{5}$



9) $6k \geq -48$



5) $13 \leq \frac{n}{4}$



10) $\frac{h}{5} < -10$

