



# Distance Learning Activities (WEEK 2)

Color in the box of the assignment you completed and save your work in your folder.

	Day 1	Day 2	Day 3	Day 4	Day 5
Reading & Phonics	Read the passage "Pam and Pat" and have a parent time you. Color the picture. Record your time.	Read the passage "Pam and Pat" and have a parent time you. Answer question #1 Record your time.	Read the passage "Pam and Pat" and have a parent time you. Answer question #2 Record your time.	Read the passage "Pam and Pat" and have a parent time you. Answer question #3 Record your time.	Read the passage "Pam and Pat" and have a parent time you. Record your time.
Math	Complete math worksheet #1 in the packet.	Practice counting and writing numbers to 120. (0-60 today)	Practice counting and writing numbers to 120. (61-120 today)	Complete math worksheet #2 in the packet.	Use 120 Chart and practice counting up to 120.
Writing	Correct the sentences. 1. we will have cake 2. the dog is big	Write your alphabet neatly, uppercase and lowercase ONLY.	Correct the sentences. 1. the cat can run fast 2. sit on the red rug	Correct the sentences. 1. what is your name 2. who is your friend	Write a story about what you like to do for fun. (3-5 sentences)
Science/SS/Technology (if you have)	<b>Science:</b> Go on a Nature Walk and draw 3 living things and 3 non-living things that you find. (If weather does not permit, do this another day.)	<b>Social Studies (S.S):</b> Draw a map of your house and street. Practice writing your address.	<b>Read a book or Explore:</b>  <a href="http://www.abcya.com">www.abcya.com</a> <a href="http://www.starfall.com">www.starfall.com</a>	<b>Social Studies (S.S):</b> Write the name of your city and state and draw 2 favorite places to go in our city.	<b>Science:</b> Draw a picture of your favorite type of weather and write 2-3 sentences about why it is your favorite.



## Pam and Pat

Pat. Pat the pig. Pam. Pam the pig. Pat and Pam see a hill. Pat and Pam ran. Pat and Pam ran on the hill. Pat and Pam ran on the tip-top of the hill. Go Pat! Go Pam! Go Pat and Pam! Go! Go! Go!

Answer Each Question Below:

1. Pat and Pam are \_\_\_\_\_.
2. Pat and Pam see a \_\_\_\_\_.
3. Pat and Pam ran to the \_\_\_\_\_ of the hill.

How long did it take you to read the passages each day?

- Mon: \_\_\_\_\_
- Tues: \_\_\_\_\_
- Wed: \_\_\_\_\_
- Thurs: \_\_\_\_\_
- Fri: \_\_\_\_\_



Name: \_\_\_\_\_ Date: \_\_\_\_\_



(1)  $2 + 1 =$

(2)  $6 + 1 =$

(3)  $5 + 4 =$

(4)  $4 + 1 =$

(5)  $4 + 3 =$

(6)  $2 + 8 =$

(7)  $6 + 3 =$

(8)  $1 + 5 =$

(9)  $3 + 1 =$

(10)  $4 + 5 =$

(11)  $4 + 6 =$

(12)  $4 + 4 =$

(13) 
$$\begin{array}{r} 6 \\ + 2 \\ \hline \end{array}$$

(14) 
$$\begin{array}{r} 1 \\ + 8 \\ \hline \end{array}$$

(15) 
$$\begin{array}{r} 1 \\ + 3 \\ \hline \end{array}$$

(16) 
$$\begin{array}{r} 2 \\ + 6 \\ \hline \end{array}$$

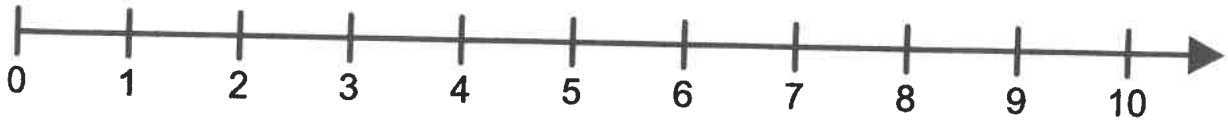
(17) 
$$\begin{array}{r} 8 \\ + 1 \\ \hline \end{array}$$

(18) 
$$\begin{array}{r} 2 \\ + 4 \\ \hline \end{array}$$

(19) 
$$\begin{array}{r} 1 \\ + 4 \\ \hline \end{array}$$

(20) 
$$\begin{array}{r} 1 \\ + 7 \\ \hline \end{array}$$

Name: \_\_\_\_\_ Date: \_\_\_\_\_



(1) 
$$\begin{array}{r} 7 \\ -2 \\ \hline \end{array}$$

(2) 
$$\begin{array}{r} 9 \\ -1 \\ \hline \end{array}$$

(3) 
$$\begin{array}{r} 9 \\ -4 \\ \hline \end{array}$$

(4) 
$$\begin{array}{r} 9 \\ -3 \\ \hline \end{array}$$

(5) 
$$\begin{array}{r} 10 \\ -6 \\ \hline \end{array}$$

(6) 
$$\begin{array}{r} 9 \\ -2 \\ \hline \end{array}$$

(7) 
$$\begin{array}{r} 6 \\ -4 \\ \hline \end{array}$$

(8) 
$$\begin{array}{r} 10 \\ -7 \\ \hline \end{array}$$

(9)  $10 - 5 =$

(10)  $8 - 1 =$

(11)  $6 - 2 =$

(12)  $8 - 6 =$

(13)  $7 - 5 =$

(14)  $7 - 4 =$

(15)  $8 - 3 =$

(16)  $4 - 3 =$

(17)  $10 - 2 =$

(18)  $9 - 5 =$

(19)  $7 - 1 =$

(20)  $5 - 3 =$