


Name: \_\_\_\_\_

RF.1.4b Read grade-level text orally with accuracy, appropriate rate, and expression on successive readings.



Veterans are helpful.

3

Veterans are brave.

6

Veterans serve our country.

10

They help keep our country safe.

16

They help keep our country strong.

22

People who served in the military can be a veteran.

32

We honor veterans because they are important.

39

We honor veterans by thanking them.

45

We honor veterans by having a holiday.

52

We honor veterans when we say the pledge.

60

We honor veterans when we respect the flag.

68

Veterans are American heroes!

72

Time your student for one minute. Record how many words the student got correct in the table to the left. After each speed timing ask the day's question. Help the student use the text to find the answer.

Words per Minute	
DAY 1	
DAY 2	
DAY 3	
DAY 4	

Day 1: What is one word to describe veterans?

Day 2: How can you become a veteran?

Day 3: Name one way to honor veterans?

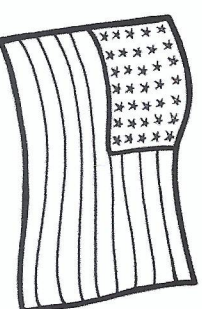
Day 4: What do veterans do for our country?

CIRCLE ONE: This week my child's comprehension was:

GREAT!

GOOD!

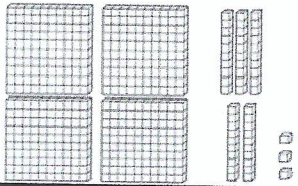
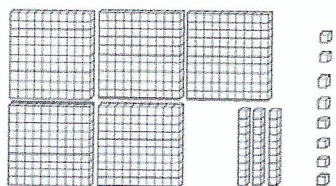
NEEDED HELP



Name:

## Weekly Math Review - Q1:2

Date:

Monday	Tuesday	Wednesday	Thursday
<p>How many tens and ones are there in the number 90?</p> <p>_____ Tens</p> <p>_____ Ones</p>	<p>Underline the digit in the tens place.</p> <p style="text-align: center;"><b>82</b></p>	<p>How many tens and ones are there in the number 45?</p> <p>_____ Tens</p> <p>_____ Ones</p>	<p>Underline the digit in the ones place.</p> <p style="text-align: center;"><b>17</b></p>
<p>Complete each family of facts.</p> <p style="text-align: center;"><b>3 5 8</b></p> <p>_____ + _____ = _____</p> <p>_____ + _____ = _____</p> <p>_____ - _____ = _____</p> <p>_____ - _____ = _____</p>	<p>What is... <span style="border: 1px solid black; padding: 2px;">79</span></p> <p>One more? _____</p> <p>One less? _____</p> <p>Ten more? _____</p> <p>Ten less? _____</p>	<p>Complete each family of facts.</p> <p style="text-align: center;"><b>12 4 8</b></p> <p>_____ + _____ = _____</p> <p>_____ + _____ = _____</p> <p>_____ - _____ = _____</p> <p>_____ - _____ = _____</p>	<p>What is... <span style="border: 1px solid black; padding: 2px;">40</span></p> <p>One more? _____</p> <p>One less? _____</p> <p>Ten more? _____</p> <p>Ten less? _____</p>
<p>Find the missing number.</p> <p><span style="border: 1px solid black; padding: 2px;">  </span> + 9 = 15</p>	<p>Find the missing number.</p> <p>8 + <span style="border: 1px solid black; padding: 2px;">  </span> = 17</p>	<p>Find the missing number.</p> <p>8 + 8 = <span style="border: 1px solid black; padding: 2px;">  </span></p>	<p>Find the missing number.</p> <p><span style="border: 1px solid black; padding: 2px;">  </span> + 6 = 13</p>
<p>Find the missing number.</p> <p>12 - <span style="border: 1px solid black; padding: 2px;">  </span> = 10</p>	<p>Find the missing number.</p> <p><span style="border: 1px solid black; padding: 2px;">  </span> - 4 = 17</p>	<p>Find the missing number.</p> <p>8 - <span style="border: 1px solid black; padding: 2px;">  </span> = 2</p>	<p>Find the missing number.</p> <p>20 - 8 = <span style="border: 1px solid black; padding: 2px;">  </span></p>
<p>Circle the equation that is TRUE.</p> <p style="text-align: center;">14 - 7 = 7</p> <p style="text-align: center;">9 + 9 = 19</p>	<p>Find the sum.</p> <p style="text-align: center;">8 + 8 + 2 = <span style="border: 1px solid black; padding: 2px;">  </span></p>	<p>Circle the equation that is TRUE.</p> <p style="text-align: center;">11 - 2 = 8</p> <p style="text-align: center;">7 + 5 = 12</p>	<p>Find the sum.</p> <p style="text-align: center;">6 + 7 + 4 = <span style="border: 1px solid black; padding: 2px;">  </span></p>
<p>There are 12 marbles in a bag. 4 more marbles are put in the bag. How many marbles are in the bag?</p> <p style="text-align: center;"><b>805</b></p> <p>_____ ones</p> <p>_____ tens</p> <p>_____ hundreds</p>	<p>There are eighteen soccer balls. I kicked 9 of them away. How many are left?</p> <p>What is the value of the 1 in 178?</p>	<p>I have 12 balloons for the party. I blew up 6 more. How many do I have altogether?</p> <p>Write the number.</p> <div style="border: 1px solid black; width: 100px; height: 20px; margin: 5px;"></div> <p>0 ones</p> <p>3 tens</p> <p>6 hundreds</p>	<p>I need 12 crayons to finish my picture. I have 8. How many more do I need?</p> <p>What is the value of the 7 in 327?</p>
<p>Write the number.</p> <div style="border: 1px solid black; width: 100px; height: 20px; margin: 5px;"></div> 	<p>Write the number.</p> <div style="border: 1px solid black; width: 100px; height: 20px; margin: 5px;"></div> 	<p>Draw 217 with base ten blocks.</p>	<p>Draw 648 with base ten blocks.</p>

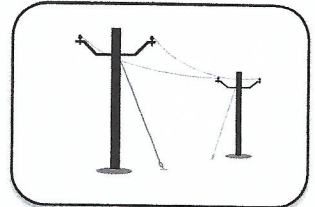


Name: \_\_\_\_\_

Directions: Read the long vowel word. Write the plural for the word. Underline the baseword. Circle the suffix. Draw a picture of the plural of each word.


pole

poles




lime

\_\_\_\_\_




stone

\_\_\_\_\_




grape

\_\_\_\_\_



nine

\_\_\_\_\_



hole

\_\_\_\_\_

